

Name _____

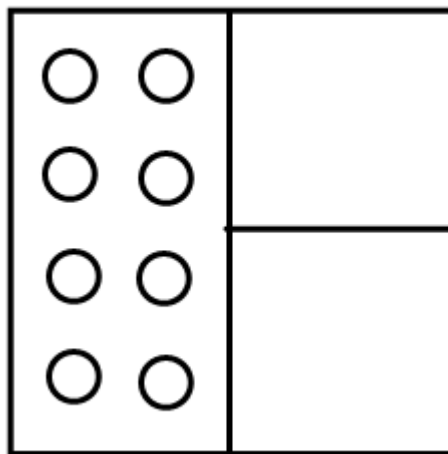
Date _____


Please visit www.worksheetsandwalkthroughs.com for a complete walkthrough of this worksheet and topic.


Fractions - Multiplying Fractions by Whole Numbers (Pizza by the Fraction...Mama Mia!)

4.NF.4, 5.NF.3, 5.NF.4 (a), 5.NF.5

Directions: Mario and Luigi decided to open up their own pizza shop. They called it Pizza by the Fraction...Mama Mia! For each whole pizza (that's right I said "whole" pizza) they charge \$12.00. If you want a topping, it's an additional \$3.00 per topping for each whole pizza. Prices are scaled according to the size of each slice. How much would they charge for each slice in the pizza shown below?



 =pepperoni



Name _____

Date _____

Pizza Cutting Board (work space!)