



Name _____

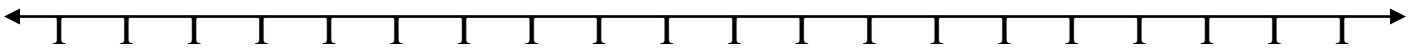
Date _____

Please visit www.worksheetsandwalkthroughs.com for more worksheets on this topic.

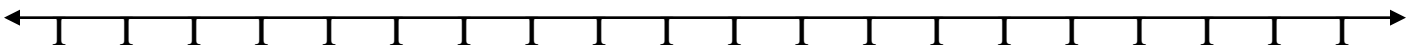
Measurement and Data- Elapsed Time
Worksheet
(4. MD.2)

Directions: Use the number lines to help you find how much time has elapsed.

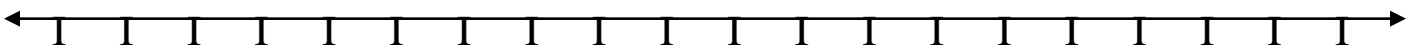
① 2:00 pm to 1:00 pm = hrs mins



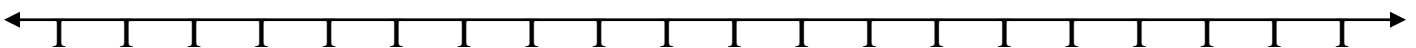
② 3:55 pm to 5:20 pm = hrs mins



③ 6:20 am to 9:10: am = hrs mins



④ 11:00 am to 3:00 am = hrs mins





Name _____

Date _____

KEY

- ① 2:00 pm to 1:00 pm = 11 hrs

- ② 3:55 pm to 5:20 pm = 1 hr 25 min

- ③ 6:20 am to 9:10: am = 2 hrs 50 min

- ④ 11:00 am to 3:00 am = 16 hrs